

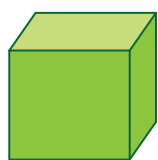
Name : _____

Sorting 2D & 3D Shapes

Basic

Sort each shape in the box as 2D or 3D and write it in the appropriate column.


2D Shapes	3D Shapes
_____	_____
_____	_____
_____	_____
_____	_____
_____	_____



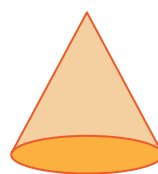
cube



triangle




sphere



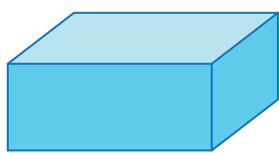
cone



rectangle




circle




rectangular prism



square



oval



cylinder

Name : _____

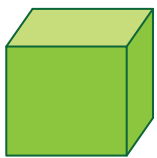
Answer key

Sorting 2D & 3D Shapes

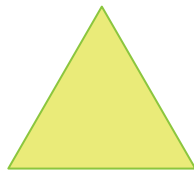
Basic

Sort each shape in the box as 2D or 3D and write it in the appropriate column.


2D Shapes	3D Shapes
triangle _____	cube _____
rectangle _____	sphere _____
circle _____	cone _____
square _____	rectangular prism _____
oval _____	cylinder _____



cube



triangle




sphere



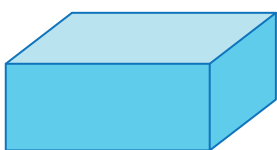
cone



rectangle




circle




rectangular prism



square



oval



cylinder