


Name : _____

Telling Time


5 minutes: S1

A) Read each clock, and write the time.

1)




2)




3)




4)



5)



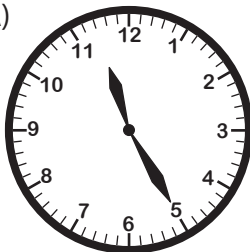
6)




B) Choose the clock that shows the given time.

Time : 12:35


A)



B)



C)



C) Choose the correct time shown by the clock.



A)

4:50

B)

10:20

C)

3:50


Name : _____

Telling Time

5 minutes: S1


A) Read each clock, and write the time.

1)




9:20

2)




5:05

3)




11:40

4)




2:25

5)



1:55

6)




8:30


B) Choose the clock that shows the given time.

Time : 12:35

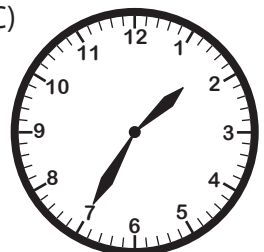
A)



B)



C)



C) Choose the correct time shown by the clock.



A)

4:50

B)

10:20

C)

3:50

Name : _____

Telling Time


5 minutes: S2

A) Read each clock, and write the time.

1)




2)




3)




4)



5)



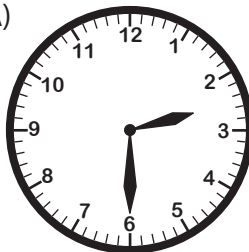
6)



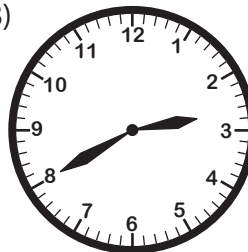
B) Choose the clock that shows the given time.

Time : 2:20


A)




B)



C)



C) Choose the correct time shown by the clock.



A)

11:25

B)

11:15

C)

5:55


Name : _____

Telling Time

5 minutes: S2

A) Read each clock, and write the time.

1)




8:35

2)




10:40

3)



6:50

4)




9:10

5)



4:45

6)

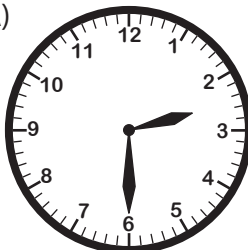


7:05


B) Choose the clock that shows the given time.

Time : 2:20


A)



B)



C)



C) Choose the correct time shown by the clock.



A)

11:25

B)

11:15

C)

5:55

Name : _____

Telling Time


5 minutes: S3

A) Read each clock, and write the time.


1)




2)




3)




4)



5)




6)



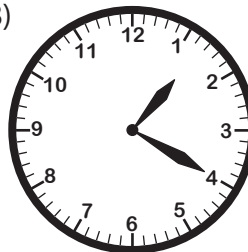
B) Choose the clock that shows the given time.

Time : 4:05


A)



B)



C)



C) Choose the correct time shown by the clock.



A)

5:15

B)

5:20

C)

4:20

Name : _____

Telling Time

5 minutes: S3


A) Read each clock, and write the time.

1)




12:50

2)




1:35

3)




7:25

4)




10:55

5)



6:00

6)



3:10


B) Choose the clock that shows the given time.

Time : 4:05

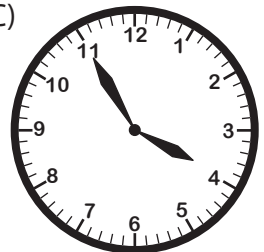
A) ✓



B)



C)



C) Choose the correct time shown by the clock.



A)

5:15

B) ✓

5:20

C)

4:20