

Name : \_\_\_\_\_

## Which 3D Shape Am I?

Name the 3D shape resembling each real-life object using the word box.

octagonal prism

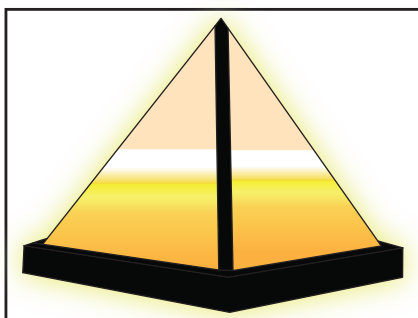
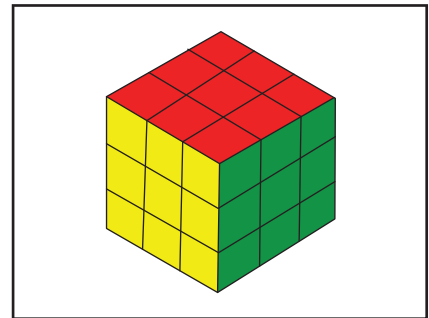

cone

cylinder

sphere

square pyramid

cube



Name : \_\_\_\_\_

**Answer key**

## Which 3D Shape Am I?

Name the 3D shape resembling each real-life object using the word box.

octagonal prism


cone

cylinder

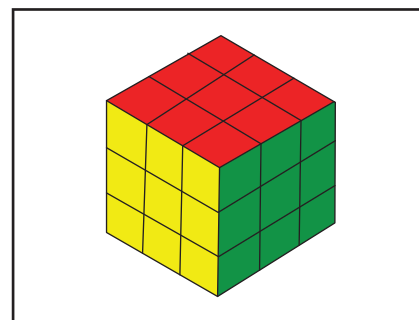
sphere

square pyramid

cube



**cone**



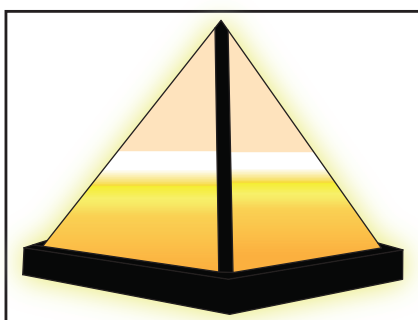
**cube**



**sphere**



**octagonal prism**



**square pyramid**



**cylinder**